

## A Tale of Four Cities: Using Data to Model Variations in Regional Climate in the Western United States – Middle School Sample Classroom Task

### Introduction

In this task, students will demonstrate their ability to describe and interpret plotted climate data to explain the reasons for differences in climate among four different United States cities: Seattle, Washington; San Francisco, California; Minneapolis, Minnesota; and Las Vegas, Nevada. The cities were chosen to show the effect latitude, topography, ocean circulation patterns, and wind circulation patterns have on the mean monthly high and low temperatures and the average monthly precipitation. The task consists of two parts. First, students compare daily temperature data with mean monthly temperature data from the town in which their school is located, which will demonstrate their understanding of climate data within their own region. Second, students compare climate data among the cities listed above, examining the effects of latitude, topography, ocean circulation patterns, and wind circulation patterns on the mean monthly high and low temperatures and the average monthly precipitation.

### Standards Bundle

*(Standards completely highlighted in bold are fully addressed by the task; where all parts of the standard are not addressed by the task, bolding represents the parts addressed.)*

#### CCSS-M

- MP.2** Reason abstractly and quantitatively.
- MP.3** Construct viable arguments and critique the reasoning of others.
- 6.SP.A.2** Understand that a set of data collected to answer a statistical question has a distribution which can be described by its center, spread, and overall shape.
- 6.SP.A.3** Recognize that a measure of center for a numerical data set summarizes all of its values with a single number, while a measure of variation describes how its values vary with a single number.
- 6.SP.B.4** Display numerical data in plots on a number line, including dot plots, histograms, and box plots.
- 6.SP.B.5c** Summarize numerical data sets in relation to their context, by:  
Giving quantitative measures of center (median and/or mean) and variability (interquartile range and/or mean absolute deviation), as well as describing any overall pattern and any striking deviations from the overall pattern with reference to the context in which the data were gathered.
- 7.SP.A.1** Understand that statistics can be used to gain information about a population by examining a sample of the population; generalizations about a population from a sample are valid only if the sample is representative of that population. Understand that random sampling tends to produce representative samples and support valid inferences.
- 7.SP.B.4** Use measures of center and measures of variability for numerical data from random samples to draw informal comparative inferences about two populations.

## NGSS

**MS-ESS2-6** Develop and use a model to describe how unequal heating and rotation of the Earth cause patterns of atmospheric and oceanic circulation that determine regional climates.

## CCSS-ELA/Literacy

- W.7.2** Write informative/explanatory texts to examine a topic and convey ideas, concepts, and information through the selection, organization, and analysis of relevant content.
- W.7.2.a** Introduce a topic clearly, previewing what is to follow; **organize ideas, concepts, and information, using strategies such as definition, classification, comparison/contrast, and cause/effect; include** formatting (e.g., headings), **graphics (e.g., charts, tables), and multimedia when useful to aiding comprehension.**
- W.7.2.b** **Develop the topic with relevant facts, definitions, concrete details, quotations, or other information and examples.**
- W.7.2.c** **Use appropriate transitions to create cohesion and clarify the relationships among ideas and concepts.**
- WHST.6-8.2** Write informative/explanatory texts, including the narration of historical events, scientific procedures/ experiments, or technical processes.
- WHST.6-8.2.a** **Introduce a topic clearly, previewing what is to follow; organize ideas, concepts, and information into broader categories as appropriate to achieving purpose; include** formatting (e.g., headings), **graphics (e.g., charts, tables), and multimedia when useful to aiding comprehension.**
- WHST.6-8.2.b** **Develop the topic with relevant, well-chosen facts, definitions, concrete details, quotations, or other information and examples.**
- WHST.6-8.2.c** **Use appropriate and varied transitions to create cohesion and clarify the relationships among ideas and concepts.**

## **Information for Classroom Use**

### Connections to Instruction

This task is aimed at students in 6<sup>th</sup> or 7<sup>th</sup> grade, and was designed to align with the 7<sup>th</sup> grade NGSS Conceptual Progressions Model Course Map (NGSS, vol. 2, Appendix K). Task Components A and B are intended to be formative within an instructional unit covering weather and climate, in order to check for student understanding of climate data prior to moving on to Task Components C through I. Task Component A could also be used as a formative assessment within a mathematical unit on the statistical description of datasets, such as in a blended course model where the associated science unit would follow the math assessment.

Task Components C through I can be used as a series of performances within an instructional unit on regional climate. Because the interpretation of the four cities' scatterplots and bar graphs is essential for successful completion of the other task components, it is recommended that students are allowed to revisit Task Component C to ensure that knowledge of math standards can be effectively used in subsequent task components. Task Components D through H could each be used as formative assessments following lessons on each "climate affecting factor," with Task Component I serving as a demonstration of understanding for the whole unit.

This task could be tailored to lower levels of the grade range by providing the scatterplots, rather than expecting students to construct them on their own.

Although students are asked to create evidence-based explanations in this task, they are primarily describing and explaining data in the task components, so this task most closely aligns with the ELA/Literacy standards for writing to inform or to explain. All task components can be used as formative assessments. This task has been aligned to the ELA/Literacy standards for 7<sup>th</sup> grade. Teachers using this task for 6<sup>th</sup> or 8<sup>th</sup> grade should consult the CCSS for the standards for informational writing for those grades.

### **Approximate Duration for the Task**

The entire task could take from 4 to 8 class periods (45-50 minutes each), spread out over the course of an instructional unit, with divisions as listed below:

Task Components A and B: 2 class periods, or fewer if the scatterplots are provided by the instructor or if the evidence-based explanation in Task Component B is used as homework.

Task Component C: 1 class period, or no time if the scatterplots are provided by the instructor

Task Components D, E, F, G, and H: each up to 1 class period, depending on whether the explanations are used as homework

Task Component I: 1-2 class periods, depending on whether the students have been labeling the map as they do the other task components.

Note that this timeline only refers to the approximate time a student may spend engaging in the task components, and does not reflect any instructional time that may be interwoven with this task.

### **Assumptions**

- Prior to each task component students should understand the scientific content behind the climate effect being assessed. For example, for Task Component G, it is assumed that students understand the rain shadow effect.
- It is assumed that students have a basic understanding of the geography of the United States, including where the four cities are located and what features they are located near (e.g., mountains, ocean, etc.).

### **Materials Needed**

Graph paper (or charts provided in Attachments 3, 4, and 5)

The teacher may decide to use a spreadsheet application for creating the scatterplots or to use a program such as GoogleEarth™ to show topography. If so, students will need to have access to these programs and know how to use them.

### **Supplementary Resources**

When considering the effect of differences in latitude on climate, students might find the Seasons and Ecliptic Simulator to be a useful tool:

<http://astro.unl.edu/classaction/animations/coordsmotion/eclipticsimulator.html>

Supplementary resources for diverse student groups' might be: writing applications for students who need scribes, translation materials, and discourse apps for students to converse (ask questions) of experts, including local climate specialists.

### **Accommodations for Instruction and Classroom Tasks**

To accurately measure three dimensional learning of the NGSS along with CCSS for mathematics, modifications and/or accommodations should be provided during instruction and assessment for students with disabilities, English language learners, and students who are speakers of social or regional varieties of English that are generally referred to as “non-Standard English”.

## Classroom Task

### Context

You have friends who live in different cities around the United States: (1) Seattle, Washington; (2) San Francisco, California; (3) Minneapolis, Minnesota; (4) and Las Vegas, Nevada. When you talk with your friends, you often wonder why the climate patterns seem so different across the country at given times of the year. For example, your friend in Minneapolis talks about getting time off from school for snow days in the winter, while your friend in Las Vegas tells you how high the temperatures reach in the summer. Your friend in Seattle tells you that it is often rainy, although the temperatures never seem to get too extreme. Your friend in San Francisco tells you about the fog that can blanket the city in spring and summer. In this task, you will look at climate data taken from each of these cities to determine what causes the climate variations you and your friends experience in your respective locations.

For this task, you are going to consider what climate means for your school's location (town), consider the climates of the cities in which your friends live, consider reasons for the differences in climate between the cities, and then make a model that predicts the types of regional climates in the western half of the United States.

### Task Components

A. Consider and compare the daily temperature data from your school's location for the same month from two different years (e.g., October, 2013, and October, 2014). Create one scatterplot for each year (two scatterplots total). For each scatterplot, do the following:

- Use the daily temperature data in the chart your teacher has provided you [see example in Attachment 1] to determine the range, mean, and median values for the high temperatures and the range, mean, and median values for the low temperatures in the month.
- Plot the daily temperatures for the month on a scatterplot [Attachment 3], with one line showing the daily high temperatures and a second line showing the daily low temperatures. The points on the scatterplot can be connected so that the changes within each dataset for the month are clearly shown.
- Draw a horizontal line on the scatterplot to represent the mean high temperature you calculated, and then draw another horizontal line on the scatterplot to represent the mean low temperature you calculated.

I. Use the scatterplots of the high and low temperatures for each year that you have made to create an evidenced-based description of what the measures of center (mean, median, and mode) can tell you about the expected temperatures for that month. How is the range evident on the graphs? If the variance in the data affects the measures of center, address this in your explanation.

II. Using both of the scatterplots you have created, write a description that compares the two populations of temperature data (the same month in two different years), noting areas of overlap and any similarities or differences in the pattern of the data on the scatterplot, the measures of center, and the range.

B. Use the data of the average monthly high and low temperatures of your school's location provided by your teacher (see Attachment 2) to make a new scatterplot showing the changes in average monthly high and low temperatures over the course of the year (Attachment 4). Monthly climatological data is created from the mean high and low temperatures for the same month (e.g., October) in many different years. Compare this scatterplot with the two daily temperature scatterplots you made previously. From your observations, create an evidence-based argument for why, when climate scientists want to study the differences in climate between two areas, they rely on the mean (average) monthly data calculated from many different years rather than the mean

daily temperature data from one entire year.

- C. For the cities of Seattle, San Francisco, Las Vegas, and Minneapolis, use the provided temperature data (Attachment 6) to make two graphs per city:
- One graph showing scatterplots for two different data sets: one set of data for the average monthly high temperature and a second set of data for the average monthly low temperature. The points on the scatterplot should be connected so that the changes within each dataset for the month are clearly shown;
  - A bar graph showing the average precipitation per month for a year (Attachment 5).
- D. Compare the temperature scatterplots for Minneapolis, MN, and Las Vegas, NV. Consider the difference between the cities in the average monthly high temperature during the hottest month and the difference between the cities in average monthly high temperature during the coldest month. Construct an argument to evaluate the claim that temperature differences observed in the scatterplots can be accounted for by differences in latitude (Attachment 7). Account for the differences between cities in terms of the heating from solar energy or the transfer of thermal energy in your argument.

On a map of the western half of the United States (Attachment 11), identify regions where differences in latitude affect the climate by:

- Labeling areas of the map where the climate would be affected (in terms of where differences in temperature occur, based on latitude);
- Indicating on the map the possible cause of the differences in climate (in terms of heating from solar energy and/or the transfer of thermal energy).

- E. Seattle, WA ( $47.6097^{\circ}$  N) is located at a more northern latitude than is Minneapolis, MN ( $44.9833^{\circ}$  N). Compare the temperature scatterplots for these two cities. Consider the difference in the yearly range in temperatures between the two cities and the difference in the temperatures of the hottest and coldest months for each city. Construct an explanation for how the differences between the cities' temperature ranges and max/min temperatures can be accounted for by the geographic location of Seattle relative to the geographic location of Minneapolis (Attachment 7). Account for the differences between these cities in terms of the heating from solar energy or the transfer of thermal energy in your explanation.

On the map of the western half of the United States (Attachment 11), use your explanation about the differences between Seattle and Minneapolis to identify regions where the proximity to certain geographic features will affect the climate by:

- Labeling areas on the map where differences in temperature occur, based on proximity to geographic features;
- Indicating on the map the possible cause of the differences in climate (in terms of heating from solar energy and/or the transfer of thermal energy);
- Drawing arrows with labels showing the direction of energy movement if there is a transfer of thermal energy.

- F. Seattle, WA ( $47.6097^{\circ}$  N) is located at a significantly higher latitude than is San Francisco, CA ( $37.7833^{\circ}$  N), but it has a similar geographic location: on the West Coast of North America. Compare the temperature scatterplots for these two cities. Consider the difference between the cities with regard to the yearly range in temperatures and the difference in the temperatures for the hottest and coldest months for each city. The California ocean current runs along the coast of California, bringing cold water from the north to the south and from deeper in the ocean up to the surface (Attachment 8). Construct an explanation for how ocean currents, driven by temperature differences and the Coriolis effect, can have a causal role in determining the differences between the cities' temperature ranges and max/min temperatures when both cities are located on the same

coast. Account for the differences between cities in terms of the heating from solar energy or the transfer of thermal energy in your explanation.

On the map of the western half of the US, identify regions where ocean currents will affect the climate by:

- Labeling areas on the map where differences in temperature occur, based on ocean currents;
- Indicating on the map the possible cause of the differences in climate (in terms of heating from solar energy and/or the transfer of thermal energy);
- Drawing arrows with labels showing the direction of ocean water circulation that would lead to differences in temperature;
- Drawing arrows with labels showing the direction of energy movement if there is a transfer of thermal energy.

- G. Consider the maps showing the topography around Seattle, San Francisco, and Las Vegas (Attachment 10). Winter precipitation data for Minneapolis represent the amount of precipitation from snowfall because it is cold enough in the winter for all the precipitation to be frozen as snow and ice. Although it would be unusual to have snow in the cities of Seattle, San Francisco, and Las Vegas, it does snow in the mountains near these cities. Construct an explanation that addresses why snowfall occurs in certain areas near these cities, even though it is usually too warm in the cities, themselves, for snow to fall there.

On the map of the western US (Attachment 11), use your explanation to identify regions where topography and altitude will affect the climate by:

- Labeling areas on the map where differences in temperature are likely to occur, based on topography.

- H. Las Vegas (36.0800° N) and San Francisco, CA (37.7833° N) are located at similar latitudes. Compare the precipitation data for these cities. Use the map of wind direction (the Westerlies, Attachment 9) and the topography of the land between the two cities (Attachment 10) to construct an explanation for what causes the difference in precipitation data between the two cities.

On the map of the western US, use your explanation to identify regions where the prevailing wind direction (and topography) will affect the climate by:

- Labeling areas on the map where differences in precipitation occur;
- Drawing arrows with labels showing the direction of air movement that would lead to differences in precipitation.

- I. Use your labeled map as a model for the western United States climate system, describe specifically where and how air and ocean circulation patterns are affecting climate in this system. Then, develop an argument from evidence that similar patterns occur throughout the Earth, and therefore that unequal heating and the rotation of the Earth creates the patterns of air circulation on the planet.

## Alignment and Connections of Task Components to the Standards Bundle

**Task Components A and B** ask students to plot and interpret daily and monthly average temperature values for their school's location (town), and **Task Component C** asks students to plot average temperature and precipitation data for four selected cities. By plotting the temperature (scatterplots) and precipitation values (bar graphs), students are partially addressing the CCSS-M standards **6.SP.B.4**. By calculating the mean, median, mode, and range and by considering their meaning relative to data on the scatterplot, students are addressing the CCSS-M standards **6.SP.A.2**, **6.SP.A.3**, and **7.SP.B.4** and partially addressing on the CCSS-M standard **6.SP.B.5c**. By comparing two populations of daily temperatures values from different years, students are addressing **7.SP.B.4** and partially addressing **7.SP.B.3**. By comparing daily temperature values with average monthly temperature values and commenting on why average values are reasonable approximations for data populations representing daily temperature, students are addressing CCSS-M practice **MP.2**, partially addressing CCSS-M standard of **7.SP.A.1**, CCSS-M practice **MP.3**, and partially addressing parts of the NGSS practices of **Analyzing and Interpreting Data** and **Using Mathematical and Computational Thinking**. By explaining and describing data, including observations of similarities and differences, students can demonstrate their understanding of **W.7.2**, **W.7.2.a**, **W.7.2.b**, **W.7.2.b**, **WHST.6-8.2**, **WHST.6-8.2.a**, **WHST.6-8.2.b**, and **WHST.6-8.2.c**.

**Task Components C, D, E, F, G, and H** ask students to compare the temperature and precipitation data of four selected cities to evaluate how latitude, geographic location, ocean currents, prevailing wind direction, altitude, and topography influence the regional climates of these cities and to build a map outlining where these will affect climate in the western half of the United States. By asking students to construct arguments and explanations, these task components together partially address parts of the NGSS core ideas of **Weather and Climate (ESS2.D as it relates to MS-ESS2-6)** and **The Roles of Water in Earth's Surface Processes (ESS2.C as it relates to MS-ESS2-6)**; parts of the practices of **Analyzing and Interpreting Data**, **Engaging in Argument from Evidence**, and **Constructing Explanations and Designing Solutions**; and parts of the crosscutting concepts of **Cause and Effect**, **Patterns**, and **Energy and Matter**. The development of the map allows students to demonstrate their understanding of the NGSS practice of **Developing and Using Models (as it relates to MS-ESS2-6)**. The use of scatterplots in the interpretation of the climatological data addresses CCSS-M standards **7.SP.A.1**, **7.SP.B.3**, and **7.SP.B.4** as well as CCSS-M practices **MP.2** and **MP.3**. In these task components, an understanding of statistical values, such as mean and range, enhances students interpretation of the effects the various listed factors have on climate, while interpretation of the plotted data populations in the context of climate enhances students' understanding of those statistical values. By constructing how and why explanations in **Task Components D, E, F, and G**, students can partially address on **W.7.2**, **W.7.2.a**, **W.7.2.b**, **W.7.2.b**, **WHST.6-8.2**, **WHST.6-8.2.a**, **WHST.6-8.2.b**, and **WHST.6-8.2.c**.

**Task Component I** asks students to describe how unequal heating and the rotation of the Earth causes air and ocean circulation patterns, and to use their labeled map as a model to describe how these patterns affect climate in the western half of the United States. This partially addresses parts of the NGSS core ideas of **Weather and Climate (ESS2.D as it relates to MS-ESS2-6)** and **The Roles of Water in Earth's Surface Processes (ESS2.C as it relates to MS-ESS2-6)**; parts of the NGSS practices of **Developing and Using Models (as it relates to MS-ESS2-6)** and **Engaging in Argument from Evidence**; and parts of the NGSS crosscutting concepts of **Cause and Effect**, **Patterns**, **Energy and Matter**, and **Systems and Systems Models (MS-ESS2-6)**.

Together, **Task Components D, E, F, G, H, and I** address the NGSS performance expectation of **MS-ESS2-6**. The task components address parts of the core idea of **ESS2.D: Weather and Climate** and of **ESS2.C: The Roles of Water in Earth's Surface Processes**, and parts of the crosscutting concept of **Systems and System Models** through the practice **Developing and Using Models** by asking for the production of a map (model) of the western half of the United States that indicates and labels areas

where temperature and precipitation are affected by solar heating, energy transfer, and air and ocean circulation patterns, and the use of that model map when explaining how and why the climate (temperature and precipitation) is affected. By (a) creating a model representative of the climate-energy system of the western United States that indicates where the climate is affected by latitude, altitude, and geographic land distribution; the direction and location of energy transfer between oceans and continent; and the location where solar heating is greater or less; and (b) by using that model to describe how these factors affect climate (including an explanation of what drives ocean and air circulation patterns), students completing the task components are integrating the disciplinary core idea with the crosscutting concept and the practice.

## Evidence Statements

### Task Component A

- Students represent daily temperature data on a scatterplot, and create one plot for each year.
- For each year, students calculate the range, mean, mode, and median values for high and low temperatures.
- Students use straight lines on the scatterplots to represent the calculated mean high and low temperature values.
- I. Students use specific features from their scatterplots as evidence to describe each of the following:
  - The mean represents the temperature around which the data points are clustered, for the time period as represented by the data;
  - The mode represents the temperature that occurs most frequently in the data;
  - The median is the temperature that falls in the middle when the data values are listed in order from smallest to largest;
  - The range represents the difference between the smallest and largest data value (how much the data points are spread out);
  - Variance in the data indicates the differences between the data points and their mean. A high variance indicates that the data points are not equally distributed on either side of the mean line and may cause the mean to be higher or lower than the median.
- II. Students compare the two data sets, describing:
  - Similarities or differences in the mean, median, mode, and range values;
  - Examples from the scatterplots of where the data ranges overlap;
  - Similarities or differences in the pattern of data on the scatterplots.

### Task Component B

- Students represent monthly average high and low temperatures on a scatterplot.
- Students make a claim that the mean (average) monthly data calculated from many years are more representative of the range of temperatures than an area could experience in any single month.
- Students describe the following observations from daily and monthly data scatterplots as evidence, and connect the evidence to the claim with the following reasoning:
  - The daily temperature data from a given year, including the mean and range, may be very different from the daily temperature data from a different year;
  - The daily temperature data from a given year, including the mean and range, may be significantly higher or lower than other years;
  - The mean of many years of climate data will take into account a much greater range in temperatures than is present from only one year of data;
  - The range in data from many years is more likely to include or overlap with the range of data from any one year.

### Task Component C



- Students represent the average monthly high and low temperatures on the scatterplots, creating one graph for each of the four cities.
- Students represent the average monthly precipitation on the bar graphs, creating one for each city.

#### **Task Component D**

- Students identify the given claim that higher latitudes have lower average temperatures, based on the differences in temperatures and differences in latitude between Minneapolis, MN and Las Vegas, NV.
- To evaluate the claim, students identify and describe the following patterns as evidence:
  - That Las Vegas, NV, shows similar spread (magnitude of the range) of yearly temperature data as Minneapolis, MN, but that the range covers higher temperatures (from scatterplot);
  - That Minneapolis, MN, is located at a higher latitude than Las Vegas, NV (from map).
  - That lower latitudes receive more direct sunlight than do higher latitudes.
- Students evaluate the evidence for relevance and sufficiency to support the claim, including the distinction between correlation and causation, as it relates to their interpretation of the data from the graphs.
- Students synthesize the relevant evidence logically using the reasoning that the higher range of yearly temperature data correlates with lower latitudes, so the amount of direct sunlight might cause the higher temperature range found in Las Vegas (compared to Minneapolis)
- Students label the map of the western United States as follows:
  - Adding labels in the higher latitudes indicating lower temperatures due to less solar heating;
  - Adding labels in the lower latitudes indicating higher temperatures due to greater solar heating.

#### **Task Component E**

- Students construct an explanation that includes the idea that areas near the ocean do not experience as large of differences in average temperature from month to month as do areas far from the ocean, based on the differences in temperatures (range and minimum temperatures) between Minneapolis, MN and Seattle, WA.
- Students identify and describe the following patterns as evidence to construct the explanation:
  - The yearly range in temperature is more narrow (i.e., not as great a difference in temperature from the cold to warm months) for data from Seattle, WA, than for the data from Minneapolis, MN (from the scatterplots);
  - The average temperatures for the warmer months are similar in both cities, but that the average temperatures for colder months are lower in Minneapolis, MN, than in Seattle, WA (from the scatterplots);
  - Minneapolis, MN, is geographically located in the interior of the continent and that Seattle, WA, is located by an ocean (from map).
  - Both land and water absorb energy from the sun, but water (e.g., oceans) releases the energy more slowly than the land does.
- To construct the explanation, students connect the evidence logically using reasoning that the transfer of thermal energy from the ocean can account for the relationship between ocean proximity and range in average temperature.
- On the given map, students
  - Identify and label areas of land near the ocean,
  - Use arrows with labels to indicate the transfer of thermal energy between the land and the ocean.

#### **Task Component F**

- Students construct an explanation that includes the idea that the differences between the cities

temperature ranges and max/min temperatures can be accounted for by the fact that ocean circulation places colder ocean water adjacent to San Francisco, CA relative to Seattle, WA.

- Students identify and describe the following patterns as evidence to construct their explanation:
  - Both cities show a relatively narrow range in yearly temperature but that the range in data for San Francisco, CA, is narrower than the range of data from Seattle, WA (from scatterplot);
  - Average temperatures for the warmer months in San Francisco, CA, are lower than the average temperatures for the warmer months in Seattle, WA (from scatterplot);
  - Although both cities are located along the coast, San Francisco, CA, is located at a place where the ocean currents are bringing in colder ocean waters (from map).
- To construct the explanation, students connect the evidence logically using reasoning that ocean circulation for a given latitude moves ocean waters to places where they are colder/warmer than typical for that latitude, in a process caused by temperature differences and the Coriolis effect. The location and movement of these ocean currents can account for warmer/cooler than typical land temperatures.
- On the map of the western United States, students:
  - Identify and label areas of land near the ocean, indicating a much smaller range of temperatures throughout the year due to the transfer of energy to and from colder-than-typical ocean currents;
  - Add arrows showing the direction of ocean water circulation;
  - Add arrows showing the transfer of thermal energy between the land and the ocean.

#### **Task Component G**

- Students construct an explanation that includes the idea that the colder temperatures at areas of higher altitude allow for snowfall to occur.
- Students identify and describe the following patterns as evidence to support their explanation:
  - The relationship between type of precipitation (rain versus snow) and areas of great topographic relief.
  - That some places on the map with snow are areas of higher altitude.
  - The air pressure is lower at higher altitudes.
- Students use reasoning to logically connect the evidence to construct an explanation that colder temperatures, associated with lower pressure, at higher altitudes can account for the presence of snowfall in places with great topographic relief.
- Students label areas of higher elevation, indicating areas of colder temperatures due to a location at higher altitudes.

#### **Task Component H**

- Students construct an explanation that connects the difference in the amount of precipitation between San Francisco, CA, and Las Vegas, NV, with the direction of air movement from the west to east over an area of great topographic relief, and that includes the idea that areas to the west of the topographic highs get more precipitation than areas to the east of the topographic highs.
- Students identify and describe the following patterns as evidence in their explanation:
  - The observation from the geographic map that there is an area of great topographic relief between San Francisco, CA, and Las Vegas, NV;
  - The observation from the precipitation bar graphs that Las Vegas, NV, has much less average precipitation per year than San Francisco, CA;
  - The observation from the image of prevailing wind directions that the wind patterns move air from over the ocean in the west to over the continent in the east;
  - The observation from the image of prevailing wind directions and the geographic map that air moves from the area near San Francisco, CA, over an area of great topographic relief to the area near Las Vegas, NV.

- To construct their explanation, students connect the evidence logically using the reasoning that the connection between the amount of precipitation and the geographic location of the city can be accounted for by the loss of moisture in the air as it moves from west to east over the areas of great topographic relief (from the San Francisco, CA area to the area near Las Vegas, NV).
- On the map of the western United States, students:
  - Identify and label areas of land to the east of mountain ranges as areas with less precipitation due to the movement of air over the mountain ranges;
  - Identify and label areas of land to the west of mountain ranges as areas with more precipitation due to the movement of air over the mountain ranges;
  - Add arrows showing the prevailing direction of air circulation (patterns of air movement).

### **Task Component I**

- Students use their map as a model to identify where, and to describe how, air/ocean circulation affects climate in the western United States. Examples cited include:
  - An example of where the movement of air affects the patterns of precipitation due to the rain shadow effect;
  - An example of where the movement of ocean water affects average temperatures along the coast due to the ability of the ocean to buffer land temperatures.
- Students develop an argument that supports the claim that air/ocean circulation affects climate throughout the planet. In their argument, students identify the following patterns as evidence to support their claim:
  - areas on the Earth where circulation of air due to unequal heating and the rotation of the Earth causes and defines the prevailing wind directions.
  - areas on the Earth where circulation of water due to unequal heating causes and defines the ocean circulation patterns.
- Students evaluate the evidence for relevance and sufficiency for supporting the claim, including the idea that phenomena may have multiple contributing causes, and any limitations their evidence may pose (e.g., the use of models, correlation vs. causation).
- Students synthesize the relevant evidence, using the following reasoning:
  - Unequal heating creates differences in density between warmer and colder air/water causing air/ocean circulation.
  - The rotation of the Earth causes air and water circulation patterns to be deflected, such as to the right in the Northern Hemisphere (clockwise rotation) and to the left in the Southern Hemisphere (counter-clockwise rotation).

## Attachment 1. Obtaining Regional Daily Temperature Data

Note for Task Component A, students are to use **actual high/low temperatures**, not daily averages. Archived temperature data may be accessed from the National Weather Service Office serving a region. Once at the regional office website, archived data may be accessed at the National Weather Service by clicking the following tabs:

- Climate-Local (on left side),
- Observed weather, select the product: preliminary monthly climate data
- Select location (example is from Reagan National Airport),
- Choose archived data and select a month (example below is from March 2003)
- Select go.

An example Preliminary Local Climatological Data report from the National Weather Service for Washington D.C., March, 2003 is shown below. The first column is the day of the month, the second column is the high temperature for the day (max) and the third column is the low temperature for the day

```

PRELIMINARY LOCAL CLIMATOLOGICAL DATA (WS FORM: F-6)

                                STATION:  WASHINGTON NATIONAL
                                MONTH:    MARCH
                                YEAR:     2003
                                LATITUDE:  38 50 N
                                LONGITUDE: 77  2 W

=====
TEMPERATURE IN F:      :PCPN:   SNOW:  WIND      :SUNSHINE: SKY      :PK WND
=====
1  2  3  4  5  6A 6B  7  8  9  10 11 12 13 14 15 16 17 18
              AVG MX 2MIN
DY MAX MIN AVG DEP HDD CDD  WTR  SNW DPTH SPD SPD DIR MIN PSBL S-S WX  SPD DR
=====
1  40 33 37 -5 28  0 0.01 0.1  3  5.7 14 190  M  M 10 18  15 190
2  52 36 44  2 21  0 0.41 0.0  1  9.2 21 320  M  M  9  1  28 320
3  42 20 31 -11 34  0  T  T  0 13.3 28 340  M  M  2  35 340
4  46 23 35 -8 30  0 0.00 0.0  0  6.0 10 180  M  M  7  M  M
5  68 38 53 10 12  0 0.07 0.0  0  5.8 16 350  M  M  9 18  18 360
6  49 30 40 -3 25  0 0.22 0.0  0 13.6 26  20  M  M  9  1  29  10
7  89 69 79  3  0 14 0.14 0.0  0  6.3 25 240  M  M  6 13  33 250
8  87 71 79  3  0 14 0.00 0.0  0  6.8 25 280  M  M  7  32 260
9  91 72 82  6  0 17 0.28 0.0  0  7.5 23 250  M  M  8 13  31 260
10 76 69 73 -3  0  8 0.23 0.0  0  9.2 16  50  M  M 10 138  18  60
11 86 67 77  1  0 12 0.04 0.0  0  6.3 20 280  M  M  7 138  25 280
12 85 61 73 -4  0  8 0.34 0.0  0  7.0 23 220  M  M  5 138  30 220
13 83 62 73 -4  0  8  T 0.0  0  3.7 13 360  M  M  6  18 350
14 79 67 73 -4  0  8  T 0.0  0  6.3 16  90  M  M  7  1  21  50
31 45 31 38 -13 27  0  T  T  0 12.7 31 300  M  M  4  8  39 320
=====
SM 1767 1152 549 0 4.20 0.1 276.6 M 205
=====
AV 57.0 37.2 8.9 FASTST PSBL % 7 MAX(MPH)
MISC ----> 37 330 44 330

```

(min). Temperatures are given in degrees Fahrenheit (°F).

(National Weather Service; <http://www.nws.noaa.gov/climate/f6.php?wfo=lxw>- Web page accessed 11-27-2013)



Climate data obtained from the NOAA website are rewritten in the table below as a sample data set in a form that could be given to students.

### Climate Data for Washington, D.C., a Hypothetical School Location

Date in March, 2010	High Temperature (°F)	Low Temperature (°F)
1	50	37
2	43	36
3	42	37
4	48	35
5	52	36
6	54	33
7	59	38
8	62	37
9	64	39
10	65	43
11	65	46
12	55	48
13	55	48
14	52	49
15	50	46
16	64	45
17	68	41
18	71	41
19	73	44
20	74	46
21	76	49
22	65	51
23	54	45
24	68	48
25	74	47
26	56	38
27	49	33
28	62	38
29	57	51
30	57	45
31	71	49

Date in March, 2013	High Temperature (°F)	Low Temperature (°F)
1	46	38
2	39	32
3	44	30
4	46	30
5	53	32
6	41	34
7	52	37
8	52	38
9	62	34
10	63	37
11	62	44
12	60	42
13	52	36
14	47	34
15	59	33
16	61	41
17	43	37
18	40	33
19	60	39
20	54	39
21	42	31
22	50	28
23	55	32
24	44	34
25	39	33
26	51	35
27	52	39
28	50	40
29	60	42
30	61	41
31	56	45

*Teachers: You will need to choose the month and the years, as well as compile the data in a chart for the students. Choose data from a year with higher than average temperatures for the month and from a year with average (or lower) temperatures. The data can be from whichever month you choose, as long as it is the same month for each year. This example shows March 2013, an average to below average year for Washington, D.C., and March 2010, an above average year.*



## Attachment 2. Obtaining Regional Monthly Climatological Data

From the Weather Channel's home page (<http://www.weather.com>):

1. Search for your city.
2. Select the monthly tab on the left.
3. Select the averages tab below the calendar.
4. You can select data in either Fahrenheit or Celsius, table or graph form.

*Note: There may be advertisements that some might find objectionable at this website, so it might be necessary to provide the students with the data already formatted in a table like the one below.*

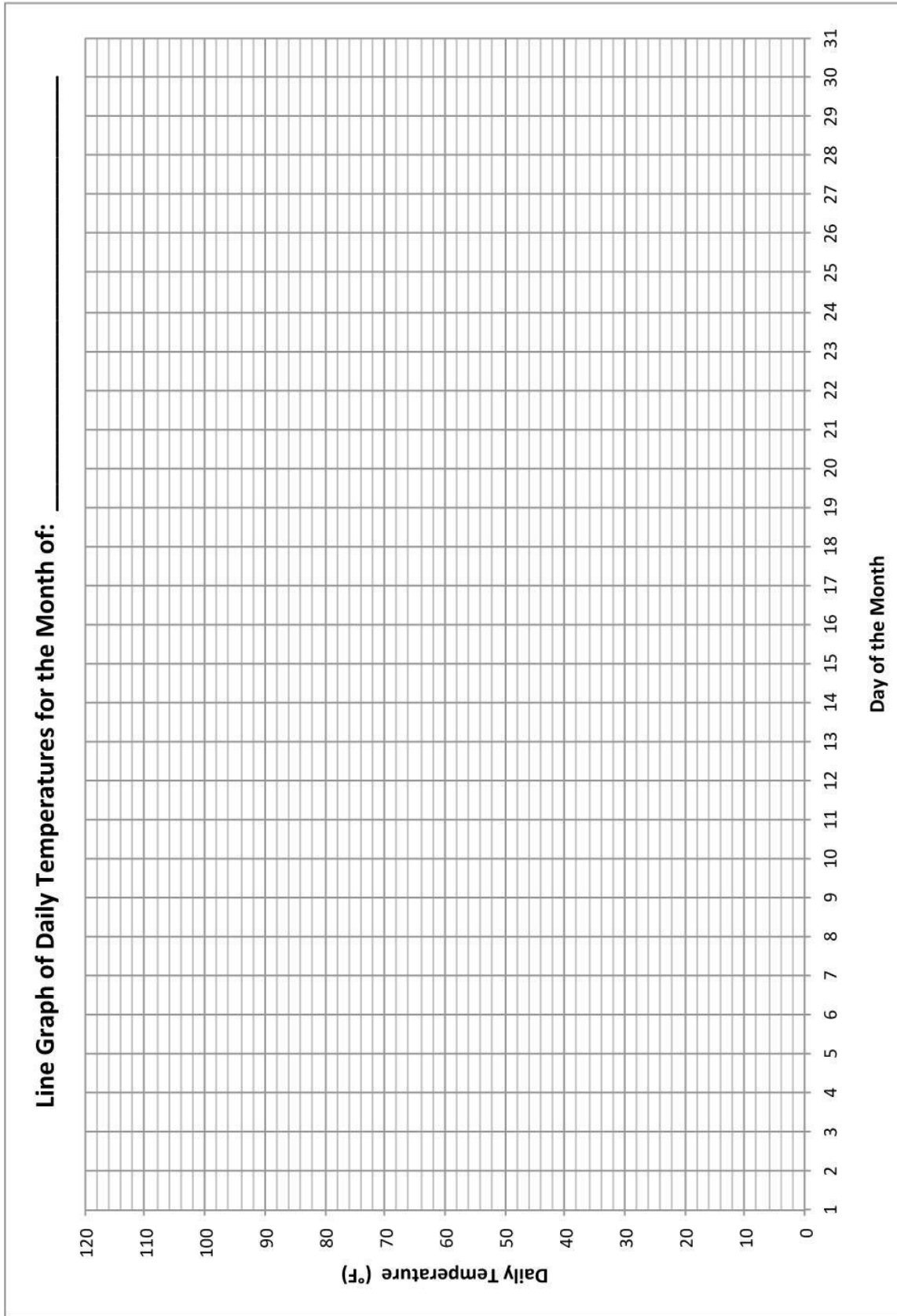
### Sample Average Monthly Temperature Data from Washington, D.C.

Month	Average Monthly High Temp (°F)	Average Monthly Low Temp (°F)
Jan	43	29
Feb	47	31
Mar	56	38
Apr	67	47
May	75	56
June	84	66
Jul	89	71
Aug	87	70
Sept	80	63
Oct	68	51
Nov	58	41
Dec	47	33

Source: <http://www.weather.com/weather/wxclimatology/monthly/DCA:9> accessed 11-27-2013.

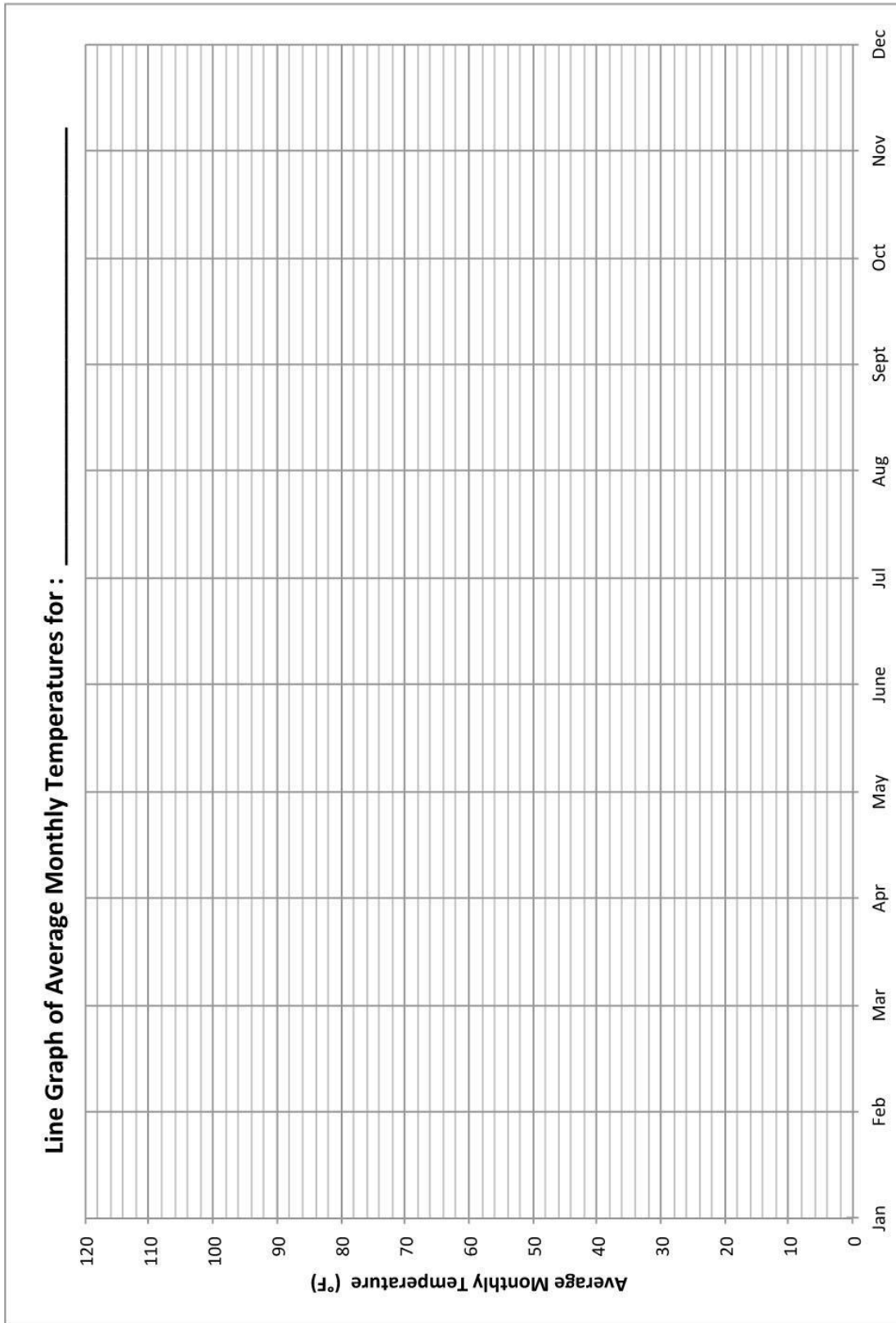
### Attachment 3. Daily Temperature Graph

Note: Teachers may choose to have their students design their own plots rather than be given the plot below.



### Attachment 4. Average Monthly Temperature Graph


Note: Teachers may choose to have their students design their own plots rather than be given the plot below.





### Attachment 5. Average Monthly Precipitation Graph

Note: Teachers may choose to have their students design their own plots rather than be given the plot below.



**Attachment 6. Average Monthly Climate Data from www.weather.com.**

Seattle, Washington

Month	Average Monthly High Temp (°F)	Average Monthly Low Temp (°F)	Average Monthly Precipitation (inches)
Jan	47	36	5.24
Feb	51	37	4.23
Mar	55	39	3.92
Apr	59	43	2.75
May	65	48	2.03
Jun	70	53	1.55
Jul	75	56	0.93
Aug	75	57	1.16
Sep	70	53	1.61
Oct	60	46	3.24
Nov	52	40	5.67
Dec	47	36	6.06

San Francisco, California

Month	Average Monthly High Temp (°F)	Average Monthly Low Temp (°F)	Average Monthly Precipitation (inches)
Jan	57	46	4.50
Feb	60	48	4.61
Mar	62	49	3.26
Apr	63	49	1.46
May	64	51	0.70
Jun	67	53	0.16
Jul	67	54	0.00
Aug	68	55	0.06
Sep	70	55	0.21
Oct	69	54	1.12
Nov	63	50	3.16
Dec	57	46	4.56

**Minneapolis, Minnesota**

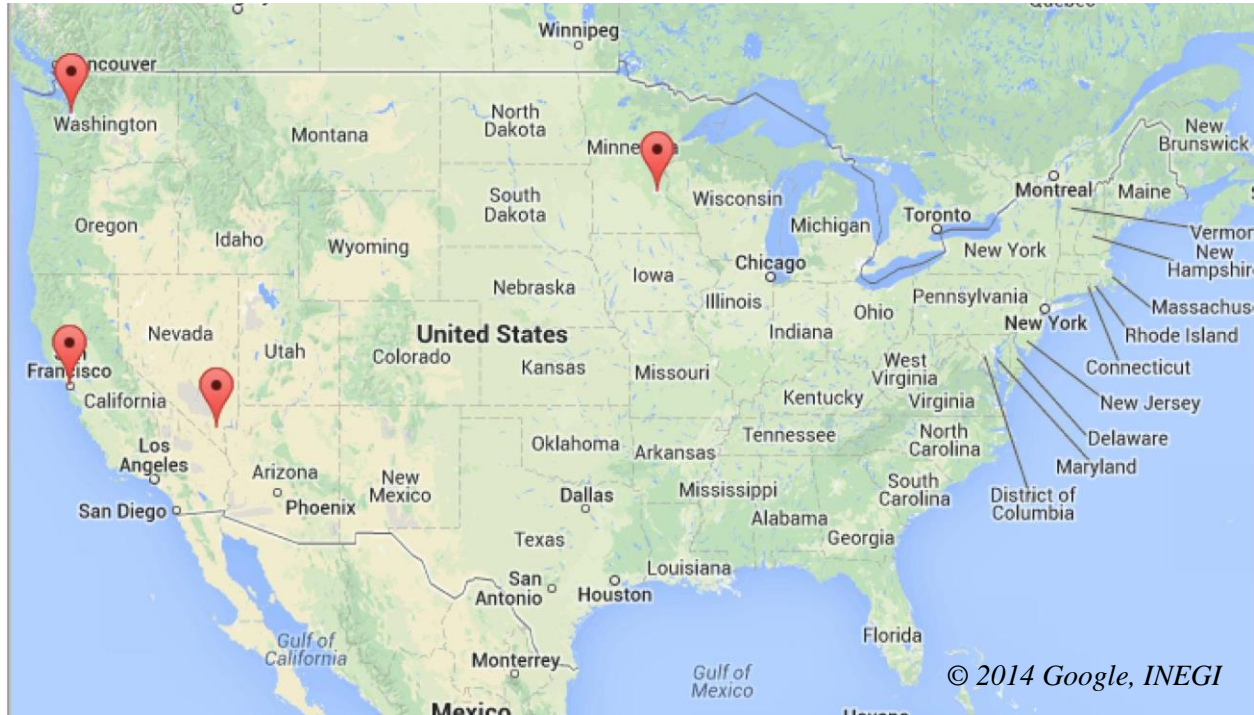
Month	Average Monthly High Temp (°F)	Average Monthly Low Temp (°F)	Average Monthly Precipitation (inches)
Jan	24	7	0.90
Feb	29	13	0.81
Mar	41	24	1.89
Apr	58	37	2.66
May	69	49	3.36
Jun	79	59	4.25
Jul	84	64	4.04
Aug	81	62	4.30
Sep	72	52	3.08
Oct	58	40	2.43
Nov	41	26	1.77
Dec	27	12	1.16

**Las Vegas, Nevada**

Month	Average Monthly High Temp (°F)	Average Monthly Low Temp (°F)	Average Monthly Precipitation (inches)
Jan	58	34	0.00
Feb	64	39	0.00
Mar	71	45	0.00
Apr	79	53	0.00
May	89	61	0.00
Jun	99	70	0.00
Jul	105	77	0.00
Aug	103	75	0.00
Sep	95	67	0.00
Oct	83	54	0.00
Nov	68	42	0.00
Dec	58	34	0.00



**Attachment 7. Map of the United States Showing the Location of the Four Cities**



Source: GoogleMaps™

Last Accessed: February 5, 2014

## Attachment 8. Map of Ocean Currents

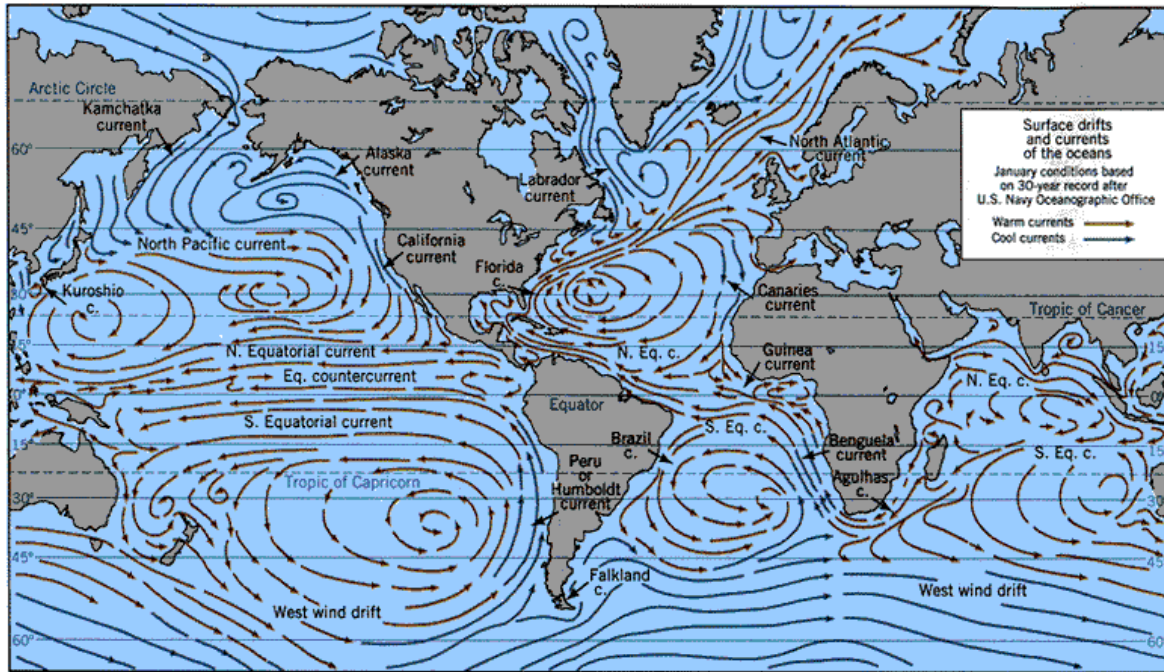


Image Sources: NASA Goddard Institute for Space Sciences Institute on Climate and Planets, US Navy Oceanographic Office; <http://icp.giss.nasa.gov/research/ppa/1997/oceanchars/currents.html>; Accessed Feb.2014

Other images can be found at:

<http://media.web.britannica.com/eb-media/62/112362-004-5788B8E2.gif>

<http://upload.wikimedia.org/wikipedia/commons/0/06/Corrientes-oceanicas.gif>

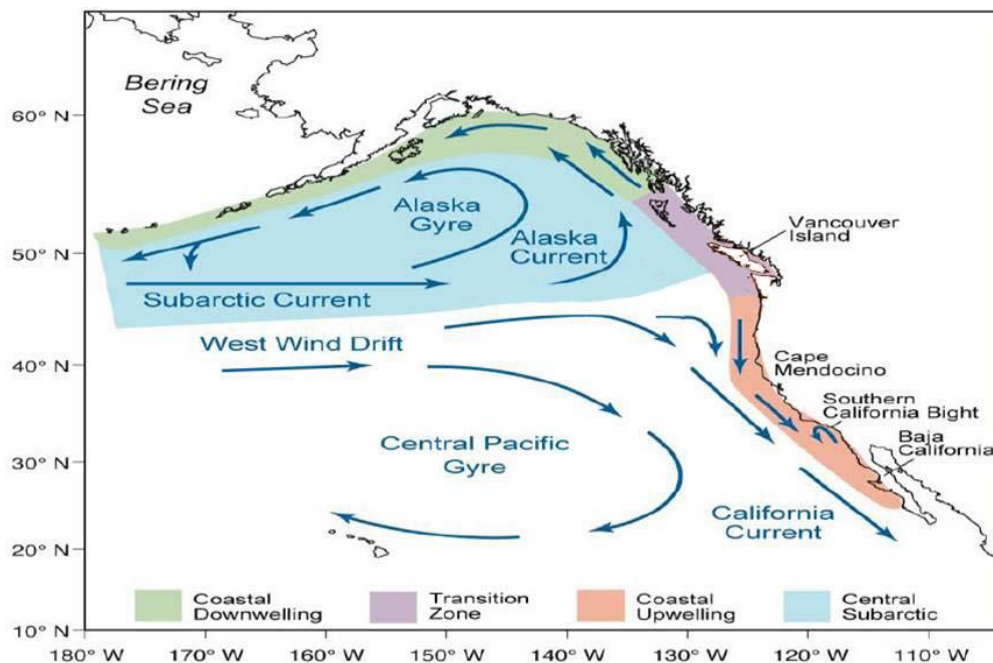


Image Source: Modified from Largier, J.L., B.S. Cheng, and K.D. Higgason, eds.

(2010). *Climate Change Impacts: Gulf of the Farallones and Cordell Bank National Marine Sanctuaries. Report of a Joint Working Group of the Gulf of the Farallones and Cordell Bank National Marine Sanctuaries Advisory Councils*, 121pp

[http://farallones.noaa.gov/manage/climate/pdf/climate\\_report.pdf](http://farallones.noaa.gov/manage/climate/pdf/climate_report.pdf) - Accessed: February 5, 2014

Version 2-published January 2015

View Creative Commons Attribution 4.0 Unported License at

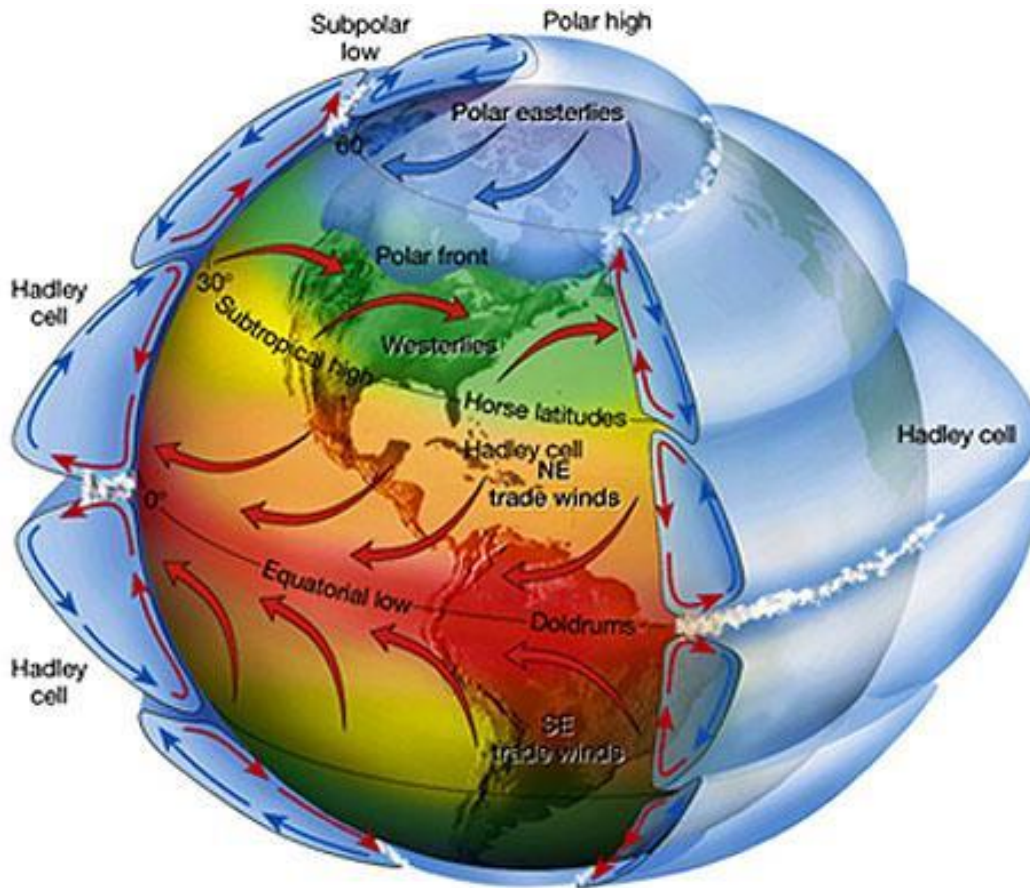
<http://creativecommons.org/licenses/by/4.0/>. Educators may use or adapt.



Page 20 of 26

## Attachment 9. Map of the Prevailing Global Wind Directions

Source: NASA's Remote Sensing Tutorial: The Water Planet - Meteorological, Oceanographic and



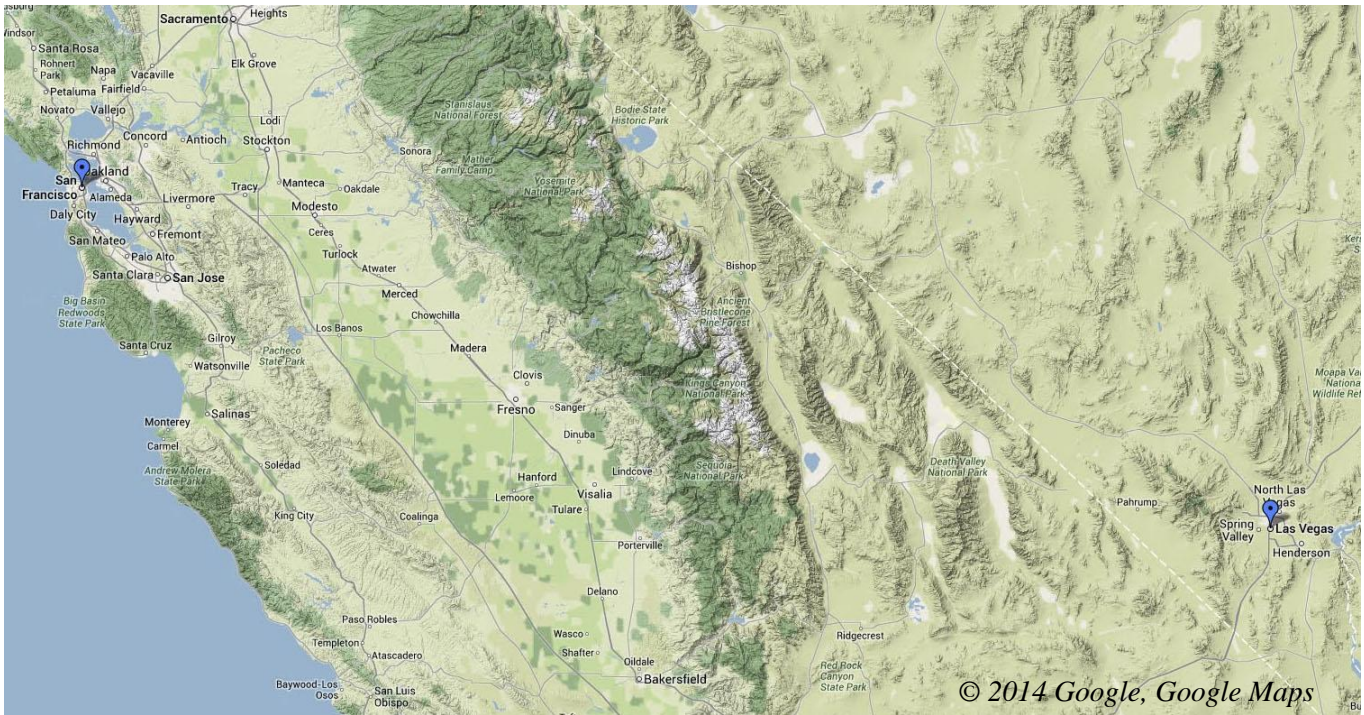
Hydrologic Applications of Remote Sensing, accessed at:

<http://serc.carleton.edu/details/images/10044.html>

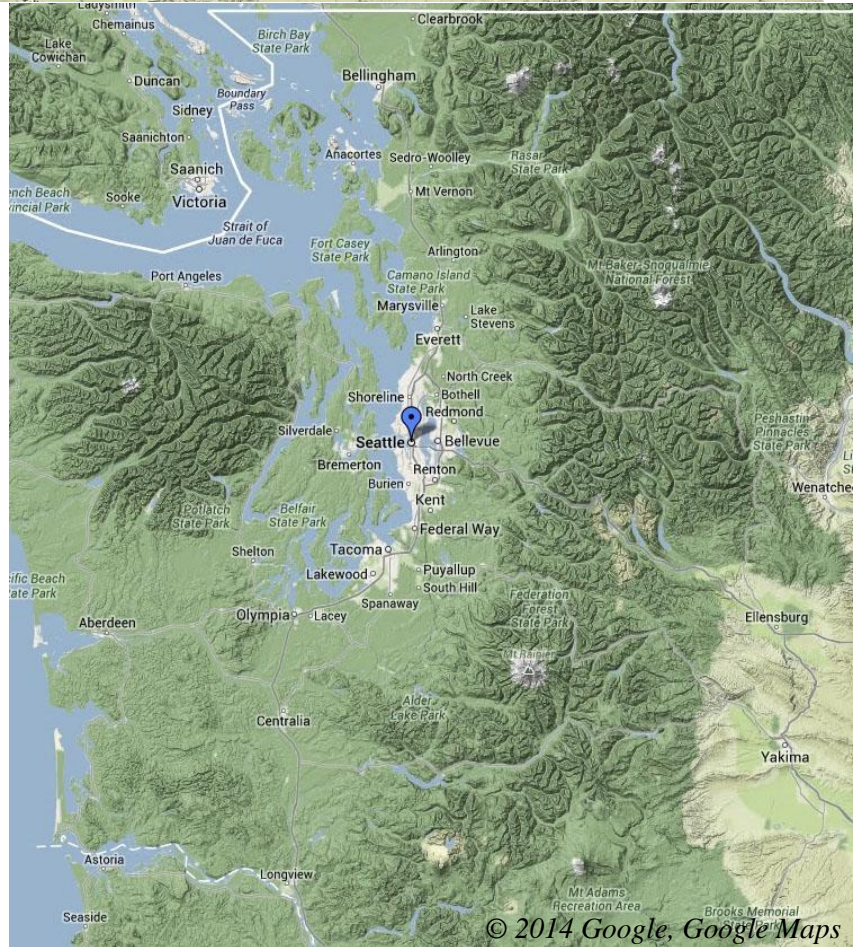
[https://www.fas.org/irp/imint/docs/rst/Sect14/Sect14\\_1c.html](https://www.fas.org/irp/imint/docs/rst/Sect14/Sect14_1c.html)

Last Accessed: February 5, 2014

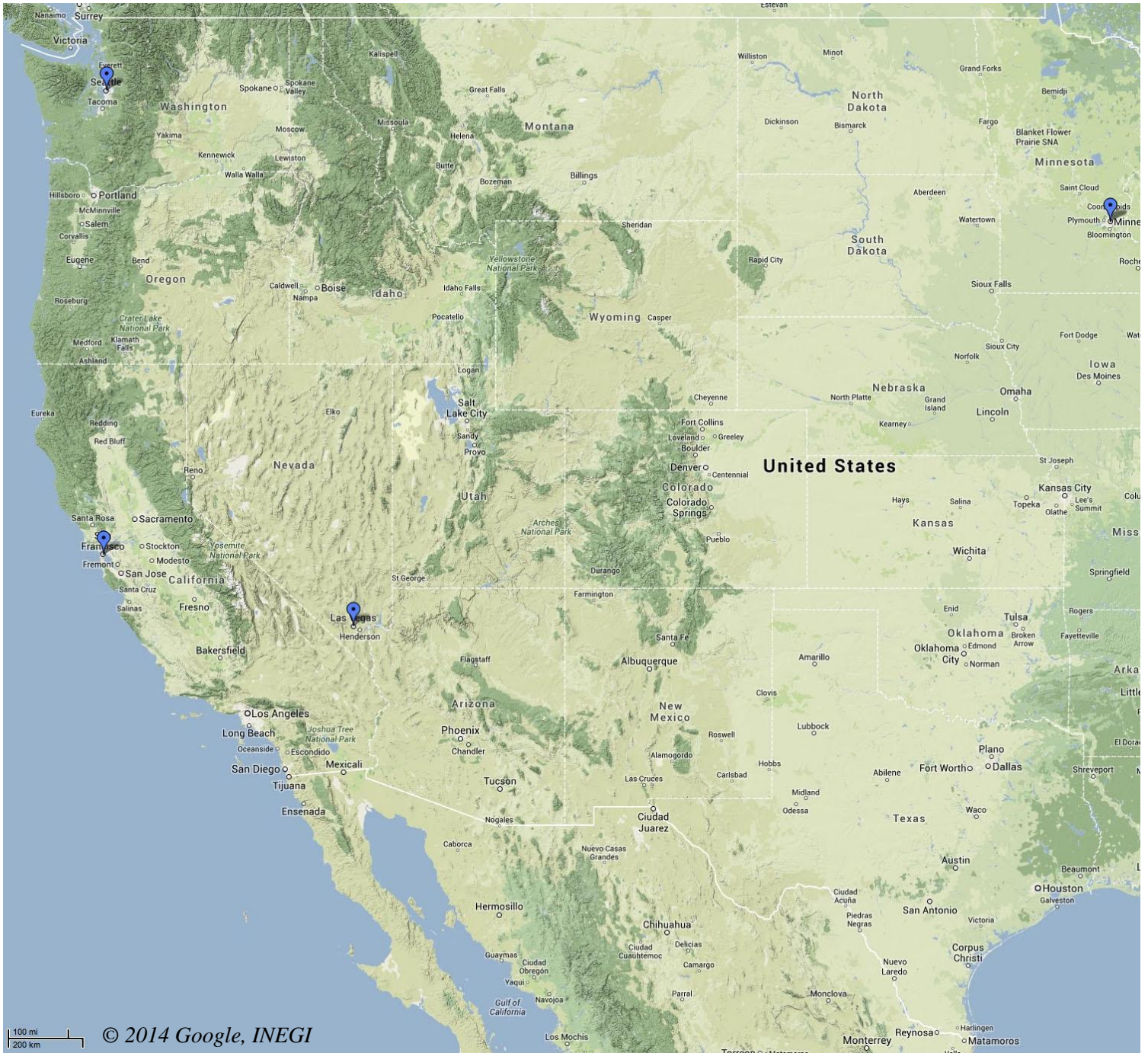
## Attachment 10. Maps Showing the Topography around San Francisco, Las Vegas, and Seattle



Source (both): GoogleMaps™  
Last Accessed: February 6, 2014



# Attachment 11. Map of the Western Continental United States



Source: GoogleMaps™  
Last Accessed: February 6, 2014



Sample Answer Plots:

